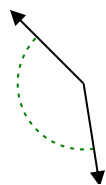




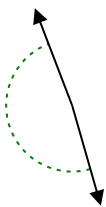
Determine if the angle shown is acute, obtuse, right or straight.

Answers

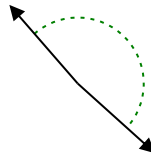
Ex)



1)



2)

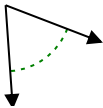


Ex. obtuse

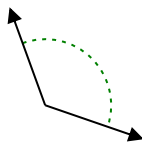
1. _____

2. _____

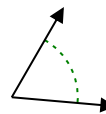
3)



4)



5)

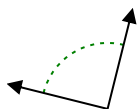


3. _____

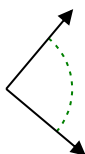
4. _____

5. _____

6)



7)



8)



6. _____

7. _____

8. _____

9)



10)



11)

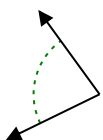


9. _____

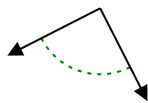
10. _____

11. _____

12)



13)



14)

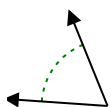


12. _____

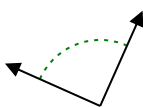
13. _____

14. _____

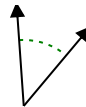
15)



16)



17)

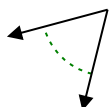


15. _____

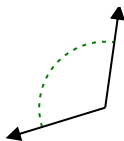
16. _____

17. _____

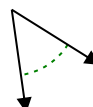
18)



19)



20)



18. _____

19. _____

20. _____

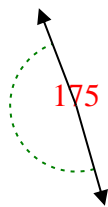


Determine if the angle shown is acute, obtuse, right or straight.

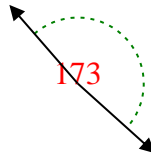
Ex)



1)



2)



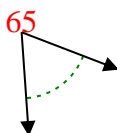
Answers

Ex. obtuse

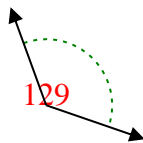
1. obtuse

2. obtuse

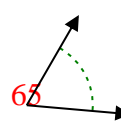
3)



4)



5)

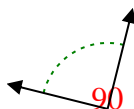


3. acute

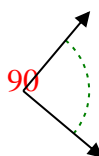
4. obtuse

5. acute

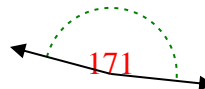
6)



7)



8)

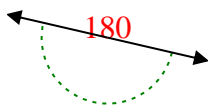


6. right

7. right

8. obtuse

9)



10)



11)

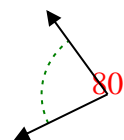


9. straight

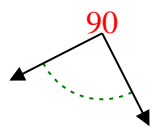
10. acute

11. straight

12)



13)



14)

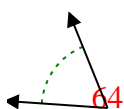


12. acute

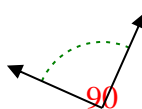
13. right

14. obtuse

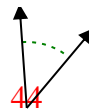
15)



16)



17)

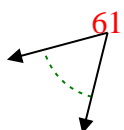


15. acute

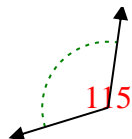
16. right

17. acute

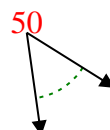
18)



19)



20)



18. acute

19. obtuse

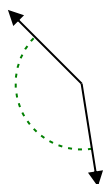
20. acute



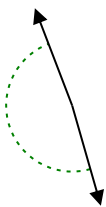
Determine if the angle shown is acute, obtuse, right or straight.

Answers

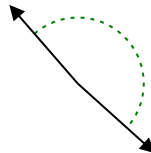
Ex)



1)



2)

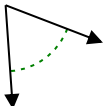


Ex. **obtuse**

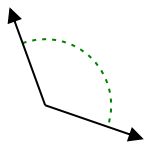
1. _____

2. _____

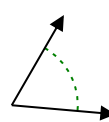
3)



4)



5)

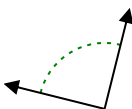


3. _____

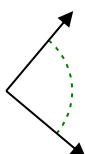
4. _____

5. _____

6)



7)



8)

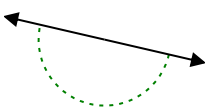


6. _____

7. _____

8. _____

9)



10)



11)

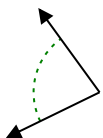


9. _____

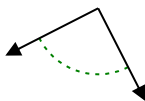
10. _____

11. _____

12)



13)



14)

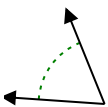


12. _____

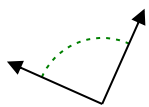
13. _____

14. _____

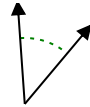
15)



16)



17)

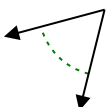


15. _____

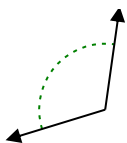
16. _____

17. _____

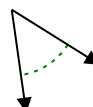
18)



19)



20)



18. _____

19. _____

20. _____